

## ASCHAM SCHOOL

## 2000 TRIAL HSC EXAMINATION

## MATHEMATICS 3 / 4 UNIT COMMON PAPER

Time allowed: 2 hours

- All questions should be attempted.
- All necessary working must be shown.
- All questions are of equal value.
- Marks may not be awarded for careless or badly arranged work.
- Write your name and the number of the question on each booklet.
- Begin each question in a new booklet.
- Approved calculators may be used.

## QUESTION 1

- a) Differentiate i)  $4\sec^3 x$   
 ii)  $\sin^{-1} \frac{1}{2}x$  (2)

- b) Find the primitive of  $\frac{1}{9x^2+1}$  (2)

- c) Find the co-ordinates of the point P which divides the line joining A(-3,4) and B(2,-8) externally in the ratio 2:5. (2)

- d) Use the substitution  $x = \cos \theta$  to evaluate

$$\int_{\frac{1}{2}}^1 \frac{\sqrt{1-x^2}}{x^2} dx \quad (3)$$

- e) If  $\alpha$ ,  $\beta$  and  $\gamma$  are the roots of the equation  $x^3 - 2x + 5 = 0$ , find the value of  $\alpha^2 + \beta^2 + \gamma^2$  (3)

## QUESTION 2

- a)  $x = 0.8$  is a good approximation to a root of the equation  $x^2 = \cos x$ .  
Use Newton's method once to find a better approximation to the root, giving your answer to 2 decimal places. (2)
- b) i) Show that  $x = 2$  is a zero of  $x^3 - 4x^2 + 8$   
ii) Hence find all the real zeros of  $x^3 - 4x^2 + 8$ , leaving your answers in simplified surd form.  
iii) Solve for  $x$ :  $\frac{4}{x-2} \leq x$  (6)
- c) Solve the equation (to the nearest degree)  
 $3 \cos x - 4 \sin x = 3$  for  $0^\circ \leq x \leq 360^\circ$ . (4)

## QUESTION 3

- a) Sketch the graph of  $y = 3 \cos^{-1}(2x + 1)$ . (2)
- b) Solve for  $x$ ,  $0 \leq x \leq 2\pi$ ,  $2 \sin^2 x < \sin x$ . (3)
- c) The acceleration of a particle moving in a straight line is given by  $\frac{d^2x}{dt^2} = \frac{-72}{x^2}$ , where  $x$  metres is the displacement from the origin after  $t$  seconds. Initially the particle is 9 metres to the right of the origin with a velocity of 4 metres per second.
- i) Show that the velocity  $v$  of the particle in terms of  $x$  is  $v = \frac{12}{\sqrt{x}}$ . Explain why  $v$  is always positive for the given initial conditions.
- ii) Find an expression for  $t$  in terms of  $x$ .
- iii) How many seconds (to the nearest second) does it take for the particle to reach a point 35m to the right of the origin? (7)

## QUESTION 4

- a) i) Show that  $\frac{d}{dx}(\cos^3 x \sin x) = 4 \cos^4 x - 3 \cos^2 x$ .  
ii) Hence show that  $\int_0^{\frac{\pi}{4}} \cos^4 x dx = \frac{1}{4} + \frac{3\pi}{32}$  (6)
- b) Prove by mathematical induction that  $\sum_{r=1}^n r 2^{r-1} = 1 + (n-1)2^n$  (5)
- c) Solve for  $x$  if  $\cos 2x = \frac{1}{2}$  (1)

## QUESTION 5

- a) Find, to the nearest degree, the acute angle between the curves  $y = x^2 - 1$  and  $y = x(x-1)$  (2)
- b) Without calculus, draw the graph of  $y = \frac{x}{(x-1)^2}$ , showing asymptotes and intercepts on axes. (2)
- c) Joyce and Agnes are playing a game. Joyce has 6 cards numbered 1 to 6 and Agnes has 8 cards numbered 7 to 14. Joyce goes first and draws a card, looks at it and replaces it in her pack. If it is even, she wins. If it is odd, it is Agnes' turn to draw a card, look at it and replace it in her pack. If Agnes draws an odd card, she wins. If Agnes draws an even card, she loses her turn and Joyce draws a card and so on.  
Find the probability that Joyce wins:
- i) in the first draw  
ii) in her second draw  
iii) in her third draw  
iv) in the long run. (4)
- d) A spherical balloon is being blown up so that its surface area is increasing at the constant rate of  $10 \text{ cm}^2/\text{second}$ . Find the rate at which the volume is increasing when  $r = 5 \text{ cm}$ . (4)

## QUESTION 6

- a) i) Show that the equation of the tangent to the parabola  $x^2 = 16y$  at any point  $P(8t, 4t^2)$  on it is  $y = tx - 4t^2$ .
- ii) Show that the equation of the line  $l$  through the focus  $S$  of the parabola which is perpendicular to the focal chord through  $P$  is  $(t^2 - 1)y + 2tx = 4(t^2 - 1)$ .
- iii) Find the locus of the point of intersection of the line  $l$  and the tangent at  $P$ . (7)
- b)  $AB$  and  $CD$  are two towers of equal heights.  $CD$  is due north of  $AB$ . From a point  $P$  on the same horizontal plane as the feet  $B$  and  $D$  of the towers, and bearing due east of the tower  $AB$ , the angles of elevation of  $A$  and  $C$ , the tops of the towers, are  $47^\circ$  and  $31^\circ$  respectively. If the distance between the towers is  $88\text{m}$ , find the height of the towers to the nearest metre. (5)

## QUESTION 7

- a) At the Tildesley Tennis Competition, Felicity served a ball from a height of  $1.8\text{m}$  above the ground. The ball was hit in a horizontal direction with initial velocity  $V = 35\text{m/s}$ . Assume that the equations of motion for the ball in flight are  $y = -5t^2 + 1.8$  and  $x = 35t$  where the acceleration due to gravity is taken at  $10\text{m/s}^2$ .
- i) How long does it take for the ball to hit the ground?
- ii) How far will the ball travel horizontally before bouncing?
- iii) The net is  $0.95$  metres high and is  $14$  metres away from where Felicity hit the ball. Will the ball clear the net? Explain. (5)
- b) Geometry question on the next page.

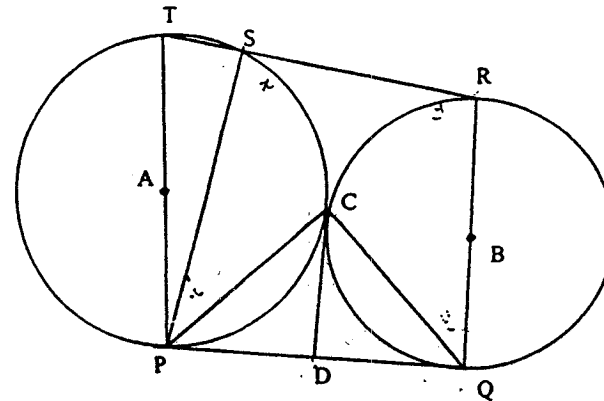
b) **DO NOT RE-DRAW THIS DIAGRAM.**

**DETACH THIS PAGE AND STAPLE IT IN YOUR BOOK FOR QUESTION 7.**

**DO THE WRITING IN YOUR ANSWER BOOK NOT ON THIS PAGE.**

A circle centre  $A$  touches a smaller circle centre  $B$  externally at a point  $C$ .  $PQ$  is a common tangent to the two circles, touching them at  $P$  and  $Q$ .  $CD$  is a common tangent to both circles at  $C$ .  $RT$  cuts the circle centre  $A$  at  $S$ .

- i) Show that  $\angle PCQ = 90^\circ$ .
- ii) Show that  $P, C$  and  $R$  are collinear.
- iii) Show that  $P, Q, R$  and  $S$  are concyclic points. (7)



①

Ascham School 2000 3/4 U

82  
84  
cos<sup>2</sup>x

Stephanie Sim

Excellent work!

1) A.) i.)  $\frac{d}{dx} 4 \sec^3 x = 12 \sec^2 x \times \frac{1}{\cos^2 x} \times \sin x$

$= 12 \sec^2 x \tan x \sec x \checkmark$

$= 12 \tan x \sec^3 x.$

ii.)  $\frac{d}{dx} \sin^{-1} \frac{x}{2} = \frac{1}{\sqrt{1-\frac{x^2}{4}}} \times \frac{1}{2} = \frac{2}{\sqrt{4-x^2}} \times \frac{1}{2} = \frac{1}{\sqrt{4-x^2}} \checkmark$

B)  $\int \frac{1}{9x^2+1} dx = \int \frac{1}{9(x^2+\frac{1}{9})} dx = \frac{1}{9} \int \frac{1}{x^2+\frac{1}{9}} dx \checkmark$

$= \frac{1}{9} \tan^{-1} 3x + C = \frac{1}{3} \tan^{-1} 3x + C$  (Must check with standard integrals table)

C)  $P = \left( \frac{2(2)-5(-3)}{-3}, \frac{2(-8)-5(4)}{-3} \right) \checkmark$

$= \left( \frac{4+15}{-3}, \frac{-16-20}{-3} \right) = \left( \frac{-19}{3}, \frac{12}{-3} \right) \checkmark$

D)  $\int_{\frac{1}{2}}^1 \frac{\sqrt{1-x^2}}{x^2} dx$

$x = \cos \theta$

$\frac{dx}{d\theta} = -\sin \theta$   
 $dx = -\sin \theta d\theta$

$= \int_{\frac{\pi}{3}}^0 \frac{\sqrt{1-\cos^2 \theta}}{\cos^2 \theta} \times -\sin \theta d\theta$

$= \int_{\frac{\pi}{3}}^0 \frac{-\sin^2 \theta}{\cos^2 \theta} d\theta = \int_{\frac{\pi}{3}}^0 -\tan^2 \theta d\theta \checkmark$

$1 + \tan^2 \theta = \sec^2 \theta$   
 $\tan^2 \theta = \sec^2 \theta - 1$

$= \int_{\frac{\pi}{3}}^0 -\sec^2 \theta + 1 d\theta$

$= (-\tan \theta + \theta) \Big|_{\frac{\pi}{3}}^0$

$= 0 - \left( -\tan \frac{\pi}{3} + \frac{\pi}{3} \right) = \tan \frac{\pi}{3} - \frac{\pi}{3}$

$= \sqrt{3} - \frac{\pi}{3} \checkmark$

11

E) Let  $P(x) = x^3 - 2x + 5 = 0$

$$\alpha + \beta + \gamma = 0 \quad \alpha\beta + \alpha\gamma + \beta\gamma = -2 \quad \checkmark$$

$$\alpha\beta\gamma = -5 \quad \checkmark$$

$$\begin{aligned} \alpha^2 + \beta^2 + \gamma^2 &= (\alpha + \beta + \gamma)^2 - 2(\alpha\beta + \alpha\gamma + \beta\gamma) \\ &= 0 - 2(-2) = \underline{4} \end{aligned}$$

2) A.)  $x^2 = \cos x$

$$x^2 - \cos x = 0$$

Let  $P(x) = x^2 - \cos x = 0$

$$P'(x) = 2x + \sin x \quad \checkmark$$

$$x = 0.8$$

$$x_1 = x - \frac{P(x)}{P'(x)} \quad \checkmark$$

$$x_1 = 0.8 - \frac{P(0.8)}{P'(0.8)} = \underline{0.82} \text{ (2dp)} \quad \checkmark$$

12

B) i.) Let  $P(x) = x^3 - 4x^2 + 8$

$$P(2) = 2^3 - 4(2^2) + 8 = 8 - 16 + 8 = 0$$

$\therefore x=2$  is a zero of  $P(x)$

ii.) If  $x=2$  is a zero of  $P(x)$ ,  $\therefore (x-2)$  is a factor of  $P(x)$

$$\begin{array}{r} x^2 - 2x - 4 \\ (x-2) \sqrt{x^3 - 4x^2 + 0x + 8} \\ \underline{x^3 - 2x^2} \quad \checkmark \\ -2x^2 + 0x \\ \underline{-2x^2 + 4x} \\ -4x + 8 \\ \underline{-4x + 8} \\ 00 \end{array}$$

$$\therefore P(x) = (x-2)(x^2 - 2x - 4)$$

$$x=2 \text{ OR } x^2 - 2x - 4 = 0$$

$$x = \frac{2 \pm \sqrt{4 - 4(-4)}}{2}$$

$$x = \frac{2 \pm \sqrt{20}}{2}$$

$$= 1 \pm \sqrt{5}$$

$\therefore$  the zeroes of  $P(x)$  are  $\checkmark$

$$\underline{x=2, x=1+\sqrt{5} \text{ and } x=1-\sqrt{5}}$$

(2)

-3-

iii.)  $\frac{4}{x-2} | -x | \leq 10$        $\frac{4}{x-2} \leq x$  (multiply throughout by  $(x-2)^2$ )

$$\frac{4}{x-2} x (x-2)^2 \leq x (x-2)^2$$

$$4(x-2) \leq x(x^2-4x+4)$$

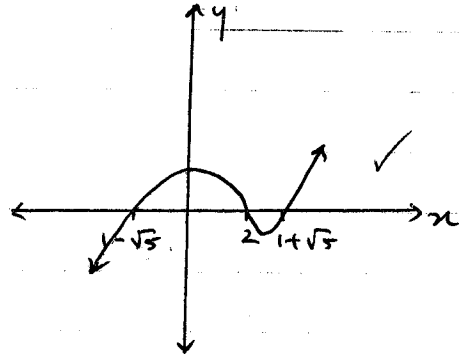
$$4x-8-x^3+4x^2-4x \leq 0$$

$$4x^2-8-x^3 \leq 0$$

$$x^3-4x^2+8 \geq 0 \quad \checkmark$$

This is true for  $1-\sqrt{5} \leq x \leq 2$

or  $x \geq 1+\sqrt{5}$        $\checkmark$



c)  $3 \cos x - 4 \sin x = 3$        $0 \leq x \leq 360^\circ$

$$3 \cos x - 4 \sin x = R \cos(x + \alpha)$$

$$= R (\cos x \cos \alpha - \sin x \sin \alpha)$$

$$3 = R \cos \alpha \quad \text{--- (1)}$$

$$4 = R \sin \alpha \quad \text{--- (2)}$$

$$\frac{(2)}{(1)} = \tan \alpha = \frac{4}{3} ; \alpha = \tan^{-1} \frac{4}{3} \quad \checkmark$$

$$R = \sqrt{a^2 + b^2} = \sqrt{9 + 16} = \sqrt{25} = 5 \quad \checkmark$$

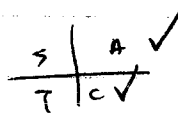
$$\therefore 3 \cos x - 4 \sin x = 5 \cos(x + 53^\circ 8') = 3$$

$$\cos(x + 53^\circ 8') = \frac{3}{5}$$

$$x + 53^\circ 8' = \cos^{-1} 0.6 \quad (53^\circ 8' \leq x + 53^\circ 8' \leq 413^\circ 8')$$

$$x + 53^\circ 8' = 53^\circ 8', 306^\circ 52', 413^\circ 8'$$

$$\therefore x = 0, 253^\circ 44', 360^\circ \quad \checkmark$$



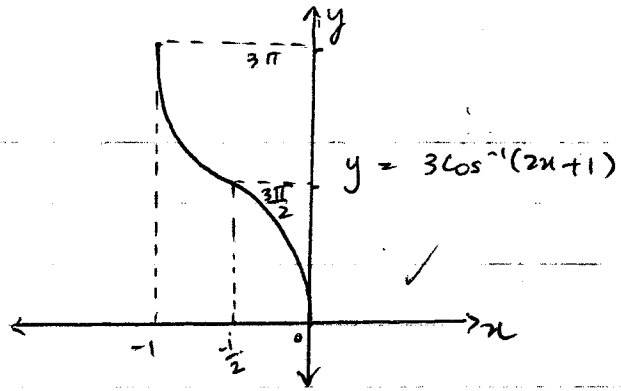
3) A)  $y = 3 \cos^{-1}(2x+1)$

$D = -1 \leq 2x+1 \leq 1$

$-2 \leq 2x \leq 0$

$-1 \leq x \leq 0$  ✓

Range  $0 \leq y \leq 3\pi$



B)  $2 \sin^2 x < \sin x$

$2 \sin^2 x - \sin x < 0$

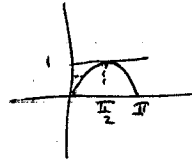
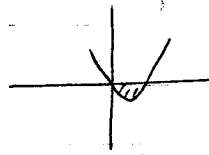
$\sin x (2 \sin x - 1) < 0$

$\sin x = 0$  or  $\sin x = \frac{1}{2}$  ✓

$\therefore 0 < \sin x < \frac{1}{2}$  ✓

$\sin x = 0$  when  $x = 0, \pi, 2\pi$

$\sin x = \frac{1}{2}$  when  $x = \frac{\pi}{6}, \frac{5\pi}{6}$



$\therefore 0 < x < \frac{\pi}{6}$  or  $\frac{5\pi}{6} < x < \pi$  ✓

c)  $\ddot{x} = -\frac{12}{x^2}$

i)  $\ddot{x} = \frac{d}{dx} \left( \frac{1}{2} v^2 \right)$  ;  $\frac{1}{2} v^2 = \int -12x^{-2} dx$

$\frac{1}{2} v^2 = \frac{-12x^{-1}}{-1} + C$

$\frac{1}{2} v^2 = \frac{12}{x} + C$  ✓

when  $x=9, v=4$

$\frac{1}{2} \cdot 16 = \frac{12}{9} + C$  ;  $8 = 8 + C$  ;  $C=0$

$\therefore \frac{1}{2} v^2 = \frac{12}{x}$  ✓

$v^2 = \frac{144}{x}$  ;  $v = \pm \frac{12}{\sqrt{x}}$  Since  $v > 0$  when  $x=9$  and  $t=0$ ,  
 $v = \frac{12}{\sqrt{x}}$  m/s

(3)

-5-

$$\text{ii.) } \frac{dx}{dt} = \frac{12}{\sqrt{x}}$$

$$\frac{dt}{dx} = \frac{\sqrt{x}}{12} \quad ; \quad t = \int \frac{\sqrt{x}}{12} dx$$

$$= \frac{2x^{\frac{3}{2}}}{3} \times \frac{1}{12} + C$$

$$t = \frac{x^{\frac{3}{2}}}{18} + C \quad \checkmark$$

When  $t=0$ ,  $x=9$ .

$$0 = \frac{9^{\frac{3}{2}}}{18} + C$$

$$0 = \frac{27}{18} + C = \frac{3}{2} + C; \quad C = \underline{\underline{-\frac{3}{2}}}$$

$$\therefore t = \frac{x^{\frac{3}{2}}}{18} - \frac{3}{2} \quad \checkmark$$

(12)

iii.) Find  $t$  when  $x=35$ .

$$t = \frac{35^{\frac{3}{2}}}{18} - \frac{3}{2} \quad \checkmark$$

$$t = \frac{\sqrt{42875}}{18} - \frac{3}{2} \quad \checkmark$$

$$= \underline{\underline{10 \text{ sec (to nearest s)}}}$$

$$4) \quad \text{A) i.) R.T.P. } \frac{d}{dx} (\cos^3 x \sin x) = 4 \cos^4 x - 3 \cos^2 x.$$

$$\text{LHS } \frac{d}{dx} (\cos^3 x \sin x) = \frac{d}{dx} [\sin x (1 - \sin^2 x) \cos x]$$

$$= \frac{d}{dx} \left( \frac{\sin 2x (1 - \sin^2 x)}{2} \right)$$

$$= \frac{1}{2} \frac{d}{dx} \sin 2x (\cos^2 x)$$

$$= \frac{1}{2} (\cos^2 x \cdot 2 \cos 2x + \sin 2x \cdot 2 \cos x \cdot -\sin x) = \frac{1}{2} (2 \cos^2 x (2 \cos^2 x - 1) - 2 \sin x \cos x \times 2 \sin x \cos x)$$



$$= \frac{1}{2} (4\cos^4 x - 2\cos^2 x - 4\sin^2 x \cos^2 x)$$

$$= \frac{1}{2} (4\cos^4 x - 2\cos^2 x - 4\cos^2 x (1 - \cos^2 x))$$

$$= \frac{1}{2} (4\cos^4 x - 2\cos^2 x - 4\cos^2 x + 4\cos^4 x) \quad \checkmark$$

$$= \frac{1}{2} (8\cos^4 x - 6\cos^2 x) = 4\cos^4 x - 3\cos^2 x = \underline{\text{RHS}}$$

ii.)  $\int_0^{\frac{\pi}{4}} \cos^4 x \, dx = \frac{1}{4} + \frac{3\pi}{32}$

show that:

we know that  $\int 4\cos^4 x - 3\cos^2 x \, dx = \cos^3 x \sin x + c$ .

$$\int 4\cos^4 x \, dx = \cos^3 x \sin x + \int 3\cos^2 x \, dx + c$$

$$\therefore \int \cos^4 x \, dx = \frac{\cos^3 x \sin x}{4} + \frac{1}{4} \int 3\cos^2 x \, dx + c \quad \checkmark$$

$$\int_0^{\frac{\pi}{4}} \cos^4 x \, dx = \left( \frac{\cos^3 x \sin x}{4} \right)_0^{\frac{\pi}{4}} + \frac{3}{8} \int_0^{\frac{\pi}{4}} (1 + \cos 2x) \, dx$$

$$= \frac{(\cos \frac{\pi}{4})^3 \sin \frac{\pi}{4}}{4} + \frac{3}{8} \left( x + \frac{1}{2} \sin 2x \right)_0^{\frac{\pi}{4}}$$

$$= \frac{(\frac{1}{\sqrt{2}})^4}{4} + \frac{3}{8} \left( \frac{\pi}{4} + \frac{1}{2} \sin \frac{\pi}{2} \right)$$

$$= \frac{1}{16} + \frac{3}{8} \left( \frac{\pi}{4} + \frac{1}{2} \right)$$

$$= \frac{1}{16} + \frac{3\pi}{32} + \frac{3}{16} = \frac{1}{4} + \frac{3\pi}{32} \quad \checkmark$$

$$\therefore \int_0^{\frac{\pi}{4}} \cos^4 x \, dx = \frac{1}{4} + \frac{3\pi}{32}$$

-7- (4)

R.T.P.  $1 \times 2^0 + 2 \times 2^1 + 3 \times 2^2 + 4 \times 2^3 + \dots + n \times 2^{n-1} = 1 + (n-1) 2^n$

b) Step 1

Let  $n=1$

LHS  $n \times 2^{n-1} = 1 \times 2^0 = 1$

RHS  $1 + (n-1) 2^n = 1 + 0 = 1 = \text{LHS.} \quad \therefore \text{true for } n=1.$

12

Step 2

Assume true for  $n=k$ .

$1 \times 2^0 + 2 \times 2^1 + 3 \times 2^2 + \dots + k \times 2^{k-1} = 1 + (k-1) 2^k$

R.T.P. also true for  $n=k+1$

$1 \times 2^0 + 2 \times 2^1 + \dots + k \times 2^{k-1} + (k+1) 2^k = 1 + k \cdot 2^{k+1}$

LHS  $1 \times 2^0 + 2 \times 2^1 + \dots + k \times 2^{k-1} + (k+1) 2^k = 1 + (k-1) 2^k + (k+1) 2^k$   
(from assumption)

$= 1 + 2^k (k-1 + k+1)$

$= 1 + 2^k (2k)$

$= 1 + 2^k \times 2 \times k = 1 + 2^{k+1} \cdot k = \text{RHS}$

Step 3

If true for  $n=k$  and  $n=k+1$  and also true for  $n=1$ , then it is true for  $n=1+1=2$ ,  $n=2+1=3$  and so on.  $\therefore$  by P.O.M.I., it is true for all integers  $n$ .

c)  $\cos 2x = \frac{1}{2}$

$2x = \cos^{-1} \left( \frac{1}{2} \right)$

$2x = 2n\pi \pm \left( \frac{\pi}{3} \right)$

$x = n\pi \pm \frac{\pi}{6}$

5)

$$a.) y = x^2 - 1$$

$$\frac{dy}{dx} = 2x \quad \text{--- } m_1$$

$$y = x^2 - x$$

$$\frac{dy}{dx} = 2x - 1 \quad \text{--- } m_2$$

$$\tan \theta = \left| \frac{2x - (2x - 1)}{1 + 2x(2x - 1)} \right|$$

$$= \left| \frac{2x - 2x + 1}{1 + 4x^2 - 2x} \right|$$

$$\tan \theta = \left| \frac{1}{4x^2 - 2x + 1} \right|$$

$$\tan \theta = \left| \frac{1}{4 - 2 + 1} \right| \sqrt{2} = \left| \frac{1}{3} \right|$$

$$\tan \theta = \frac{1}{3}$$

$$\theta = 18^\circ 26'$$

To find where the two curves intersect, solve  $y = x^2 - 1$  and  $y = x^2 - x$  simult.

$$x^2 - 1 = x^2 - x$$

$$x^2 - 1 - x^2 + x = 0$$

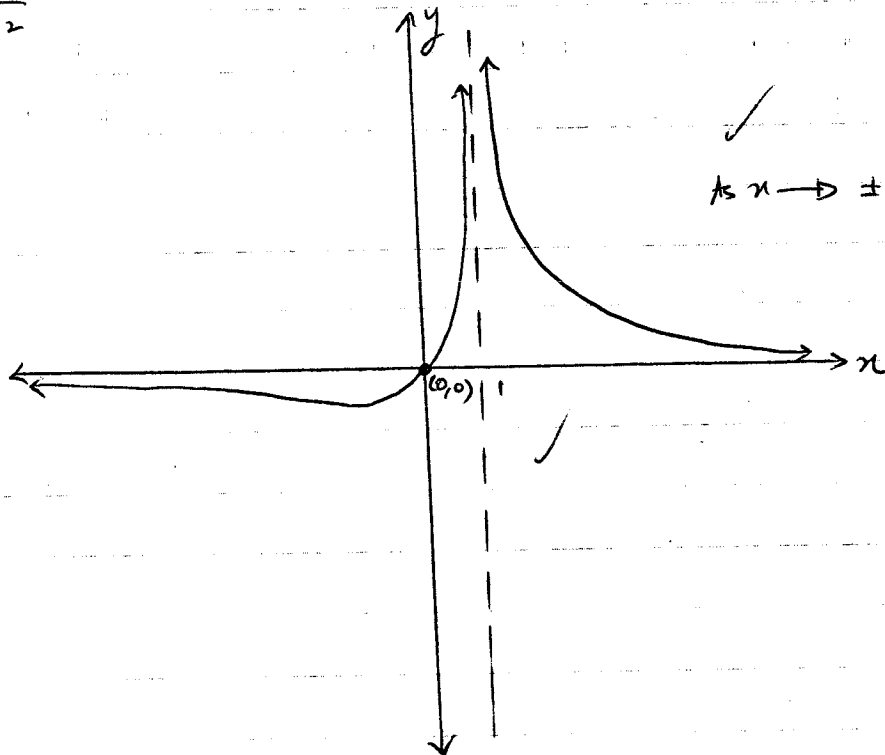
$$x - 1 = 0$$

$$x = 1 \quad \checkmark$$

$\therefore$  they intersect at  $x = 1$

( $\theta$  is acute.  $\therefore \tan \theta > 0$ )

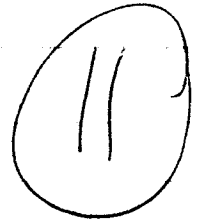
$$b) y = \frac{x}{(x-1)^2}$$



(5)

-9-

c) i.)  $P(\text{Joyce wins first draw}) = P(\text{even})$   
 $= \frac{3}{6} = \frac{1}{2}$  ✓



ii.)  $P(\text{J wins 2nd draw}) = P(\text{J loses 1st}) \times P(\text{A loses 1st}) \times P(\text{J wins 2nd})$   
 $= \frac{1}{2} \times \frac{1}{2} \times \frac{1}{2} = \frac{1}{8}$  ✓

iii.)  $P(\text{J wins 3rd draw}) = \frac{1}{2} \times \frac{1}{2} \times \frac{1}{2} \times \frac{1}{2} \times \frac{1}{2}$   
 $= \frac{1}{32}$  ✓

iv.)  $P(\text{J wins}) = P(\text{A wins})$

$\therefore P(\text{J wins in long run}) = \frac{1}{2} + \frac{1}{8} + \frac{1}{32} + \dots \Rightarrow S_{\infty} = \frac{a}{1-r}$   
 $= \frac{\frac{1}{2}}{1 - \frac{1}{4}} = \frac{2}{3}$

d)  $\frac{dA}{dt} = 10 \text{ cm}^2/\text{s}$ . Find  $\frac{dV}{dt}$  when  $r = 5 \text{ cm}$ .

$A = 4\pi r^2$

$\frac{dA}{dr} = 8\pi r$ ,  $\frac{dr}{dt} = \frac{dr}{dA} \times \frac{dA}{dt} = \frac{1}{8\pi r} \times 10$  ✓

$= \frac{5}{4\pi r}$   $\therefore \frac{dr}{dt} = \frac{5}{4\pi r}$

$V = \frac{4}{3}\pi r^3$

$\frac{dV}{dr} = 4\pi r^2$  ✓

$\frac{dV}{dt} = \frac{dV}{dr} \times \frac{dr}{dt} = 4\pi r^2 \times \frac{5}{4\pi r} = 5r$  ✓

$\frac{dV}{dt} = 5r$  ( $r = 5$ )

$\therefore \frac{dV}{dt} = 25 \text{ cm}^3/\text{s}$  ✓

6) A.) i.)  $x^2 = 16y$ ;  $y = \frac{x^2}{16}$ ;  $y' = \frac{x}{8}$ .

At  $P(8t, 4t^2)$ , grad. of  $tg t = \frac{8t}{8} = t$ . ✓

Eqn of  $tg t$  is  $(y - 4t^2) = t(x - 8t)$

$y = tx - 8t^2 + 4t^2$  ✓

$y = tx - 4t^2$

ii.) Focal length;  $4A = 16$

$A = 4$

∴ since vertex of parabola is  $(0, 0)$ ,

Focus =  $(0, 4)$

∴  $S = (0, 4)$

grad of  $SP = \frac{4t^2 - 4}{8t} = \frac{t^2 - 1}{2t}$  ✓

Since  $SP \perp l$ , grad. of  $l = \frac{-2t}{t^2 - 1}$  ( $m_1 m_2 = -1$ )

Eqn of  $l$  is =

$(y - 4) = \frac{-2t}{t^2 - 1}(x - 0)$  ✓

$(t^2 - 1)(y - 4) = -2tx$

$y(t^2 - 1) - 4(t^2 - 1) + 2tx = 0$  ✓

$\therefore y(t^2 - 1) + 2tx = 4(t^2 - 1)$

iii.) Point of intersection of line  $l$  and  $tg t$  at  $P$  is given by

$tx - 4t^2 = \frac{4(t^2 - 1) - 2tx}{t^2 - 1}$

$(t^2 - 1)(tx - 4t^2) = 4(t^2 - 1) - 2tx$

$(t^2 - 1)(tx - 4t^2 - 4) = -2tx$

$t^3x - 4t^4 - t^2x + 4 + 2tx = 0$

$x(t^3 - t + 2t) - 4t^4 + 4 = 0$

$x = \frac{4t^4 - 4}{t^3 - t + 2t}$

$y = t \left( \frac{4t^4 - 4}{t^3 - t + 2t} \right) - 4t^2$

(6)

- 11 -

iii) Eqn of tangent at P is  $y = tx - 4t^2$ 

$$y + 4t^2 - tx = 0$$

$$4t^2 - tx + y = 0$$

$$t = \frac{x \pm \sqrt{x^2 - 4(4)(y)}}{8} = \frac{x \pm \sqrt{x^2 - 16y}}{8}$$

Since P lies on parabola,  $x^2 = 16y$ ,  $x^2 - 16y = 0$ .

$$t = \frac{x \pm \sqrt{16y - 16y}}{8}$$

$$t = \frac{x}{8} \quad (\text{sub into } l) \quad \checkmark$$

$$\text{Eqn of } l \text{ is } = (t^2 - 1)y + 2tx = 4(t^2 - 1)$$

$$(t^2 - 1)(y - 4) + 2tx = 0$$

$$\left(\frac{x^2 - 16}{64} - 1\right)(y - 4) + 2x\left(\frac{x}{8}\right) = 0 \quad \checkmark$$

$$\left(\frac{x^2 - 64}{64}\right)(y - 4) + \frac{x^2}{4} = 0$$

$$y - 4 = \frac{-x^2}{4} \quad ; \quad y - 4 = \frac{-x^2}{4} \times \frac{64 \cdot 16}{x^2 - 64}$$

$$y - 4 = \frac{-16x^2}{x^2 - 64}$$

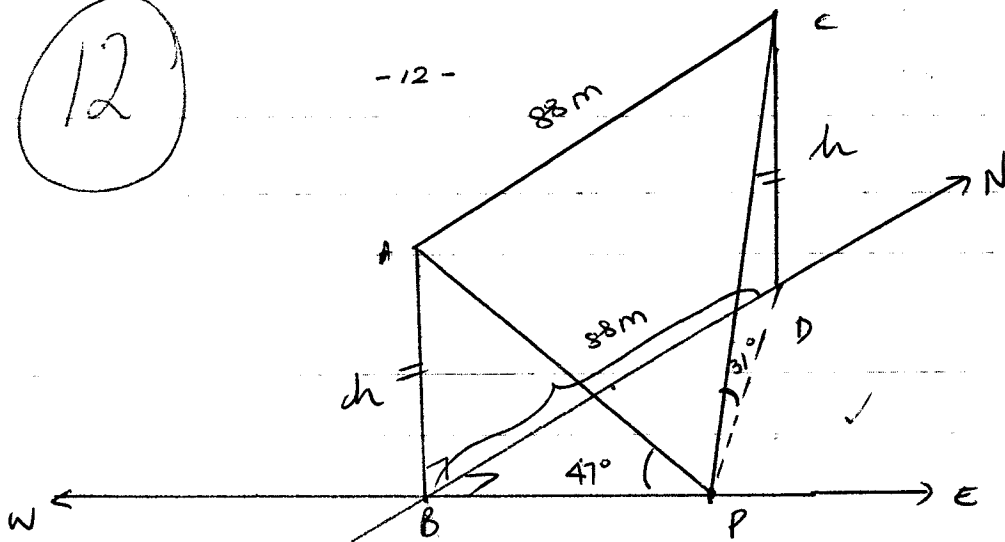
$$y = 4 - \frac{16x^2}{x^2 - 64} \quad \checkmark$$

$$y = \frac{4x^2 - 256 - 16x^2}{x^2 - 64}$$

$$y = \frac{-12x^2 - 256}{x^2 - 64} \quad \checkmark$$

12

-12-



let  $AB = CD = h$ .

In  $\triangle ABP$ ,  $\tan 43 = \frac{BP}{h}$  ;  $BP = h \tan 43$  ✓

In  $\triangle CPD$ ,  $\tan 59 = \frac{PD}{h}$  ;  $PD = h \tan 59$

In  $\triangle BDP$ ,  $BD^2 = BP^2 + PD^2$  (Pythag. theorem) ✓

$88^2 = h^2 \tan^2 43 + h^2 \tan^2 59$  ✓

$88^2 = h^2 (\tan^2 59 + \tan^2 43)$

$h^2 = \frac{88^2}{\tan^2 59 + \tan^2 43}$  ✓

$h = 63.8 \text{ m}$  ( $h > 0$  because it is a <sup>positive</sup> length)

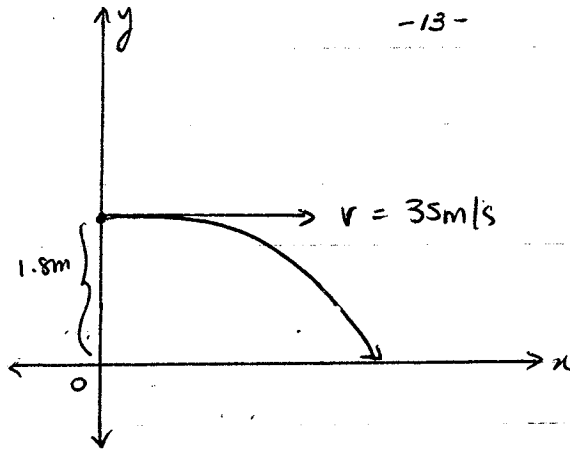
$\therefore h = 64 \text{ m}$  (to nearest m) ✓

7

-13-

7)

A)



Given:

$$y = -5t^2 + 1.8$$

$$\dot{y} = -10t$$

$$x = 35t$$

$$\dot{x} = 35$$

i.) Find  $t$  when  $y = 0$ .

$$1.8 - 5t^2 = 0 \quad \checkmark$$

$$5t^2 = 1.8$$

$$t^2 = 0.36$$

$$t = 0.6 \quad (t > 0) \quad \checkmark$$

$\therefore$  it takes 0.6s for ball to hit ground.

ii.) When  $t = 0.6$ ,  $x = 35(0.6)$

$$= 21\text{m} \quad \checkmark$$

$\therefore$  the ball travels 21m before bouncing.

iii.) When  $x = 14$ ,  $35t = 14$

$$t = \frac{14}{35} = \frac{2}{5} \text{ s} \quad \checkmark$$

When  $t = \frac{2}{5} \text{ s}$ ,  $y = -5\left(\frac{4}{25}\right) + 1.8$

$$= 1\text{m} > 0.95\text{m} \quad \checkmark$$

$\therefore$  the ball WILL clear the net, by 0.05m



12

B) i.)  $DC = DP = DQ$  (pts from exterior pt, equal)

$\therefore \triangle PDC$  and  $\triangle DCQ$  are isos  $\triangle$ .

Let  $\angle CPD = \alpha$ .  $\angle CPD = \angle PCD = \alpha$  (base  $\angle$  of isos  $\triangle$  equal)

$\angle CDQ = 2\alpha$  (exterior  $\angle$  equals sum of two interior opp  $\angle$ )  
 $\angle DCQ = \frac{180^\circ - 2\alpha}{2}$  ( $\angle$  sum  $\triangle = 180^\circ$ , base  $\angle$  of isos  $\triangle$  equal)

$$= 90^\circ - \alpha$$

$$\angle DCQ + \angle PCD = 90^\circ - \alpha + \alpha = 90^\circ$$

$$\therefore \angle PCQ = 90^\circ$$

ii.)  $\angle PCQ = 90^\circ$ , (already proven)

$\angle QCR = 90^\circ$  ( $\angle$  in semicircle with radius  $RQ = 90^\circ$ )

$$\angle PCR = \angle PCQ + \angle QCR$$

$$= 90^\circ + 90^\circ = 180^\circ$$

$\therefore PCR$  is a straight line.

$\therefore P, C,$  and  $R$  are collinear

iii.)  $\angle CPD = \alpha$ .

$\therefore \angle APC = 90^\circ - \alpha$  ( $\angle APD = 90^\circ$ ,  $\angle$  made by radius

$\angle TCP = 90^\circ$  ( $\angle$  in semicircle  $= 90^\circ$ ) and  $\text{tgt} = 90^\circ$ )

$$\therefore \angle PTC = 180^\circ - (90^\circ - \alpha) - 90^\circ \quad (\angle \text{sum } \triangle = 180^\circ)$$

$$= \alpha$$

$$\angle PTT = \angle PSC = \alpha$$

$$\text{Since } \angle APC = 90^\circ - \alpha, \quad \angle TSC = 180^\circ - (90^\circ - \alpha) \quad (\text{opp } \angle \text{ of cyclic quad } PQST \text{ are supp})$$

$$= 90^\circ + \alpha$$

$$\therefore \angle CSR = 180^\circ - (90^\circ + \alpha) \quad (\text{straight line} = 180^\circ)$$

$$= 90^\circ - \alpha$$

$$\angle PSR = \angle PSC + \angle CSR$$

$$= \alpha + 90^\circ - \alpha = 90^\circ$$

$$\therefore \angle PSR = 90^\circ$$

$$\angle PSR + \angle PQR = 90^\circ + 90^\circ = 180^\circ$$

$\therefore PQRS$  is a cyclic quad (opp  $\angle$  of cyclic

$\therefore P, Q, R$  and  $S$  are concyclic points, quad are supp)